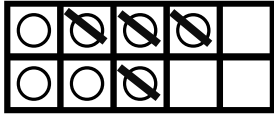
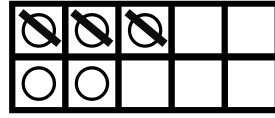


6 +5	Calcul	Calculer des différences en ligne
-----------------------	--------	-----------------------------------

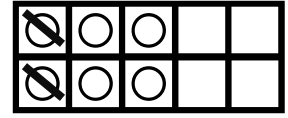
1. Ecris les opérations et calcule.



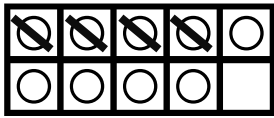
$$\underline{\quad} - \underline{\quad} = \underline{\quad}$$



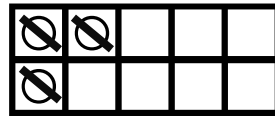
$$\underline{\quad} - \underline{\quad} = \underline{\quad}$$



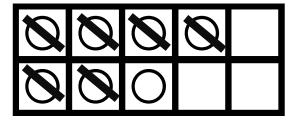
$$\underline{\quad} - \underline{\quad} = \underline{\quad}$$



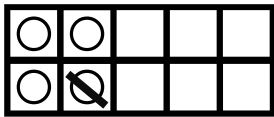
$$\underline{\quad} - \underline{\quad} = \underline{\quad}$$



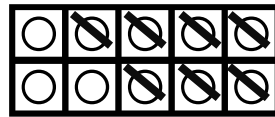
$$\underline{\quad} - \underline{\quad} = \underline{\quad}$$



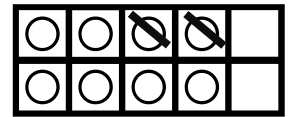
$$\underline{\quad} - \underline{\quad} = \underline{\quad}$$



$$\underline{\quad} - \underline{\quad} = \underline{\quad}$$



$$\underline{\quad} - \underline{\quad} = \underline{\quad}$$



$$\underline{\quad} - \underline{\quad} = \underline{\quad}$$

2. Calcule les différences en ligne.

$$3 - 1 = \underline{\quad}$$

$$10 - 3 = \underline{\quad}$$

$$9 - 5 = \underline{\quad}$$

$$7 - 4 = \underline{\quad}$$

$$8 - 1 = \underline{\quad}$$

$$7 - 7 = \underline{\quad}$$

$$10 - 7 = \underline{\quad}$$

$$9 - 4 = \underline{\quad}$$

$$5 - 0 = \underline{\quad}$$

$$4 - 2 = \underline{\quad}$$

$$7 - 3 = \underline{\quad}$$

$$9 - 8 = \underline{\quad}$$