
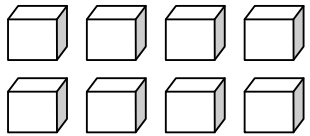


	Les nombres de 0 à 18	
---	-----------------------	--

18	dix-huit	 
----	----------	--

1. Indique le nombre d'objets présents dans chaque collection.

	⇒	<input style="width: 80%; height: 30px;" type="text"/>
---	---	--

	⇒	<input style="width: 80%; height: 30px;" type="text"/>
---	---	--

	⇒	<input style="width: 80%; height: 30px;" type="text"/>
---	---	--

	⇒	<input style="width: 80%; height: 30px;" type="text"/>
---	---	--

	⇒	<input style="width: 80%; height: 30px;" type="text"/>
---	---	--

2. Ecris le nombre suivant.

14 ⇒ _____ 17 ⇒ _____ 9 ⇒ _____ 5 ⇒ _____

13 ⇒ _____ 8 ⇒ _____ 15 ⇒ _____ 10 ⇒ _____

3. Range les nombres du plus petit au plus grand

12 – 19 – 8 – 11 – 20 – 14

<
 <
 <
 <
 <

1	2	3	4	5	6	7	8	9	10	11	12	13	14	15	16	17	18
---	---	---	---	---	---	---	---	---	----	----	----	----	----	----	----	----	----

4. Dessine le nombre de perles indiqué.

7 ⇒ _____

15 ⇒ _____

12 ⇒ _____

9 ⇒ _____

5. Compte de 2 en 2.

0 - 2 - - - - - - - - -

1 - 3 - - - - - - - - -

6. Colorie



La **13**^{ème} case.

<input type="checkbox"/>	<input type="checkbox"/>	<input type="checkbox"/>	<input type="checkbox"/>	<input type="checkbox"/>	<input type="checkbox"/>	<input type="checkbox"/>	<input type="checkbox"/>	<input type="checkbox"/>	<input type="checkbox"/>	<input type="checkbox"/>	<input type="checkbox"/>	<input type="checkbox"/>	<input type="checkbox"/>	<input type="checkbox"/>	<input type="checkbox"/>	<input type="checkbox"/>	<input type="checkbox"/>	<input type="checkbox"/>	<input type="checkbox"/>
--------------------------	--------------------------	--------------------------	--------------------------	--------------------------	--------------------------	--------------------------	--------------------------	--------------------------	--------------------------	--------------------------	--------------------------	--------------------------	--------------------------	--------------------------	--------------------------	--------------------------	--------------------------	--------------------------	--------------------------

La **17**^{ème} case.

<input type="checkbox"/>	<input type="checkbox"/>	<input type="checkbox"/>	<input type="checkbox"/>	<input type="checkbox"/>	<input type="checkbox"/>	<input type="checkbox"/>	<input type="checkbox"/>	<input type="checkbox"/>	<input type="checkbox"/>	<input type="checkbox"/>	<input type="checkbox"/>	<input type="checkbox"/>	<input type="checkbox"/>	<input type="checkbox"/>	<input type="checkbox"/>	<input type="checkbox"/>	<input type="checkbox"/>	<input type="checkbox"/>	<input type="checkbox"/>
--------------------------	--------------------------	--------------------------	--------------------------	--------------------------	--------------------------	--------------------------	--------------------------	--------------------------	--------------------------	--------------------------	--------------------------	--------------------------	--------------------------	--------------------------	--------------------------	--------------------------	--------------------------	--------------------------	--------------------------

7. Ecris le nombre en lettres.



dix-huit,