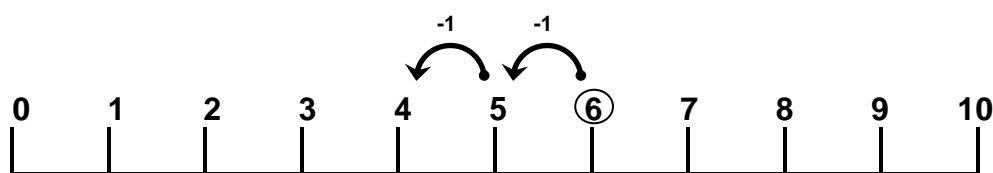
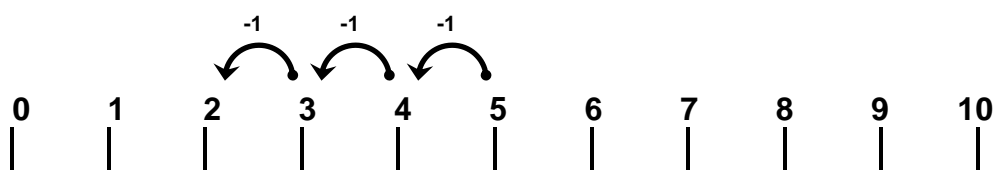


6 +5	Calcul	Calculer des différences en ligne
---------	--------	-----------------------------------

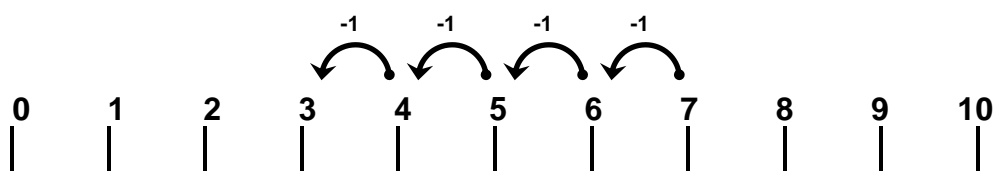
Observe la bande numérique. Ecris l'opération et calcule.



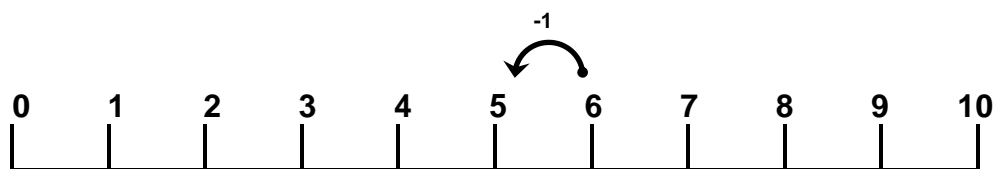
$$6 - 2 = \underline{\quad}$$



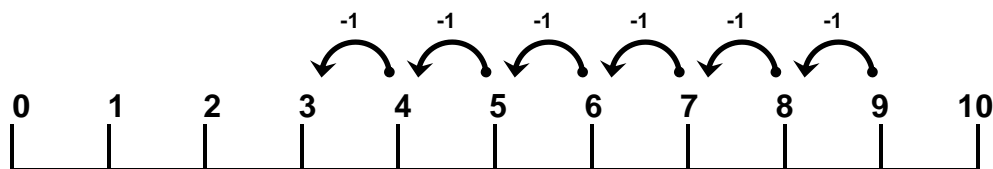
$$\underline{\quad} - \underline{\quad} = \underline{\quad}$$



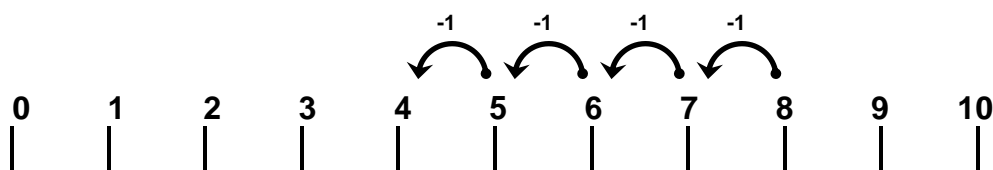
$$\underline{\quad} - \underline{\quad} = \underline{\quad}$$



$$\underline{\quad} - \underline{\quad} = \underline{\quad}$$



$$\underline{\quad} - \underline{\quad} = \underline{\quad}$$



$$\underline{\quad} - \underline{\quad} = \underline{\quad}$$