




6 +5	Calcul	Calculer des différences en ligne
----------------	---------------	--

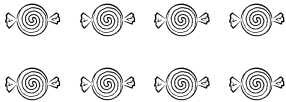
1. Lis l'opération. Barre les objets nécessaires.


$6 - 2 = 4$


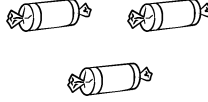
$8 - 5 = 3$



$7 - 3 = 4$



2. Barre pour calculer les différences.



$8 - 2 = \underline{\quad}$


$6 - 3 = \underline{\quad}$



$3 - 2 = \underline{\quad}$

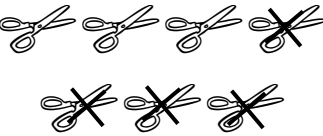

$5 - 3 = \underline{\quad}$

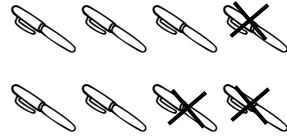

$7 - 5 = \underline{\quad}$



$10 - 7 = \underline{\quad}$


3. Ecris l'opération et calcule.

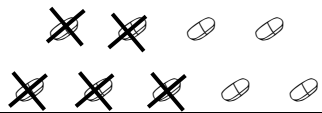

$\underline{\quad} - \underline{\quad} = \underline{\quad}$


$\underline{\quad} - \underline{\quad} = \underline{\quad}$


$\underline{\quad} - \underline{\quad} = \underline{\quad}$


$\underline{\quad} - \underline{\quad} = \underline{\quad}$


$\underline{\quad} - \underline{\quad} = \underline{\quad}$


$\underline{\quad} - \underline{\quad} = \underline{\quad}$