
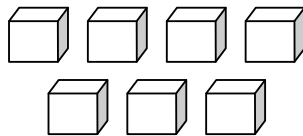
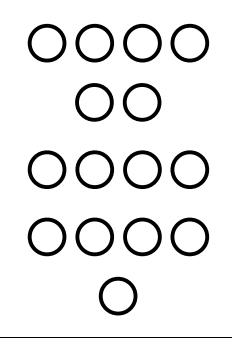
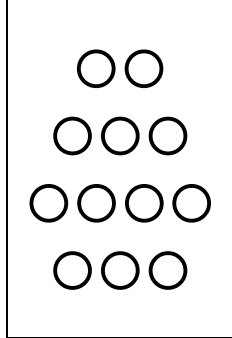

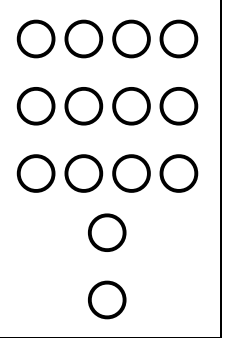
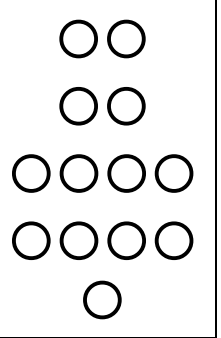


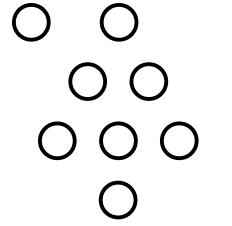

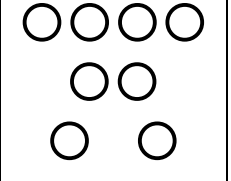
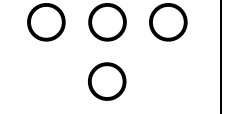

|   |                       |  |
|---|-----------------------|--|
|  | Les nombres de 0 à 17 |  |
|---|-----------------------|--|

|    |          |  |   |
|----|----------|--|---|
| 17 | dix-sept |  |  |
|----|----------|--|---|

1. Dénombre.

|  |  |  |   |  |
|--|--|--|---|--|
| <br><div style="border: 1px solid black; height: 40px; width: 100%;"></div> | <br><div style="border: 1px solid black; height: 40px; width: 100%;"></div> | <br><div style="border: 1px solid black; height: 40px; width: 100%;"></div> | <br><div style="border: 1px solid black; height: 40px; width: 100%;"></div> | <br><div style="border: 1px solid black; height: 40px; width: 100%;"></div> |
|--|--|--|---|--|


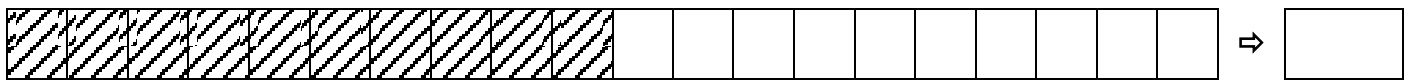
2. Complète.

|   |   |   |  |   |
|---|---|---|--|---|
| <br><div style="border: 1px solid black; padding: 5px; font-weight: bold; font-size: 18px;">15</div> | <br><div style="border: 1px solid black; padding: 5px; font-weight: bold; font-size: 18px;">10</div> | <br><div style="border: 1px solid black; padding: 5px; font-weight: bold; font-size: 18px;">16</div> | <br><div style="border: 1px solid black; padding: 5px; font-weight: bold; font-size: 18px;">14</div> | <br><div style="border: 1px solid black; padding: 5px; font-weight: bold; font-size: 18px;">17</div> |
|---|---|---|--|---|

3. Complète.

|   |  |  |   |  |   |  |  |  |    |  |  |    |  |    |  |  |
|---|--|--|---|--|---|--|--|--|----|--|--|----|--|----|--|--|
| 1 |  |  | 4 |  | 6 |  |  |  | 10 |  |  | 13 |  | 15 |  |  |
|---|--|--|---|--|---|--|--|--|----|--|--|----|--|----|--|--|

4. Indique le nombre de cases colorées.



5. Calcule.

$10 + 2 = \underline{\quad}$

$10 + 8 = \underline{\quad}$

$10 + 1 = \underline{\quad}$

$10 + 5 = \underline{\quad}$

$10 + 6 = \underline{\quad}$

$10 + 0 = \underline{\quad}$

$10 + 3 = \underline{\quad}$

$10 + 9 = \underline{\quad}$

$10 + 7 = \underline{\quad}$

6. Place les signes  $>$  ou  $<$ .

$12 \underline{\quad} 10$

$10 \underline{\quad} 15$

$11 \underline{\quad} 14$

$14 \underline{\quad} 17$

$17 \underline{\quad} 16$

$13 \underline{\quad} 12$

$11 \underline{\quad} 10$

$11 \underline{\quad} 16$

$15 \underline{\quad} 11$

$10 \underline{\quad} 10$

$17 \underline{\quad} 15$

$15 \underline{\quad} 14$

7. Ecris en lettres.

$10 \Rightarrow \underline{\hspace{2cm}}$

$11 \Rightarrow \underline{\hspace{2cm}}$

$13 \Rightarrow \underline{\hspace{2cm}}$

$17 \Rightarrow \underline{\hspace{2cm}}$

$14 \Rightarrow \underline{\hspace{2cm}}$

$16 \Rightarrow \underline{\hspace{2cm}}$

$15 \Rightarrow \underline{\hspace{2cm}}$

$12 \Rightarrow \underline{\hspace{2cm}}$