

4. Place les signes < ou >.

$15 \text{ ____ } 9$

$14 \text{ ____ } 10$


$13 \text{ ____ } 11$

$8 \text{ ____ } 12$


$5 \text{ ____ } 14$

$13 \text{ ____ } 10$

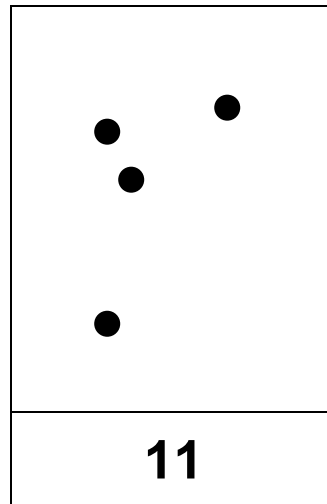
5. Complète les collections.




12



10



11



15

6. Ecris les nombres.

